

← → ↻ 🏠 ⓘ Not secure | examsutra.com/exam/

## Enter your 2019 Prelim Exam Access Code:

---

[Click here to view a sample manual.](#)

---

### Purchase By Credit Card

If you do not have an access code, purchase it here

Only **Visa** and **Master Card** are accepted for the time being.  
Notice: Your credit card details will not be stored and does not pass through our server.  
Your payment transaction is communicated directly with the credit card payment gateway.

**Only \$2.19 for use until 31 Oct 2019**

You can access the 2019 Prelim Exam Papers for the 14 top schools with a **valid Access Code**.

If you do not have an access code, you can purchase it by paying SG\$2.19 using a credit card. Hiwire is only the payment gateway and hosting company for Examsutra. If there are any issues, you may contact 62930128 for help.

Your credit card payment is secure as no credit card details will be stored in our server. Your payment is transacted directed with the credit card gateway called WorldPay.

**Note that this Access Code is valid until 31 Oct 2019.**

After you enter the Access Code, click “Submit” and you should get to the next screen listing of schools.

School	Math	Science	English	Chinese	Higher Chinese
ACS	36 ✓	40 ✓	20 ✓	18 ✓	
Aitong	32 ✓	44 ✓	21 ✓	21 ✓	13 ✓
CBS	32 ✓	40 ✓	22 ✓		
CHIJ	41 ✓	39 ✓	35 ✓	22 ✓	14 ✓
MGS	35 ✓	40 ✓	27 ✓	19 ✓	13 ✓
Nan Hua	38 ✓	42 ✓	23 ✓	16 ✓	12 ✓
Nanyang	40 ✓	40 ✓	20 ✓	26 ✓	12 ✓
Pei Chun				16 ✓	
RGS	36 ✓	47 ✓	24 ✓	18 ✓	13 ✓
Rosyth	37 ✓	41 ✓	22 ✓	14 ✓	
SCGS	34 ✓	27 ✓	24 ✓	19 ✓	
Tao Nan	32 ✓	43 ✓	22 ✓		
St Nicholas	41 ✓	40 ✓	35 ✓	20 ✓	14 ✓
Henry Park	35 ✓	42 ✓	27 ✓		

The numbers indicate the number of pages in that paper which comprises of both paper 1 and 2.

The answers are available in the last 1 or 2 pages of each subject.

Empty spaces means no paper is available.

[Click on the tick to access the papers.](#)

Close

1

2

3

4

5

6

7

8

9

10

11

12

13

14

15

16

17

18

19

20

21

22

23

24

25

26

27

28

29

30

31

32

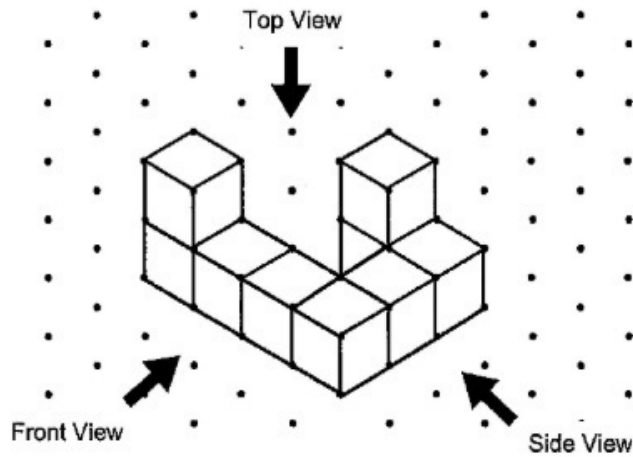
33

34

35

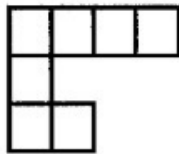
36

14. 9 cubes are stacked to form the solid below.

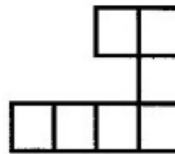


Which of the following is the top view of the solid?

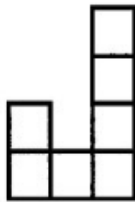
1)



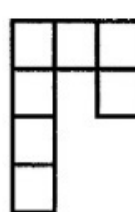
2)



3)



4)



Select the pages and do your questions. Wish you a successful exam.

**The answers, if any, are in the last 1 or 2 pages.**